

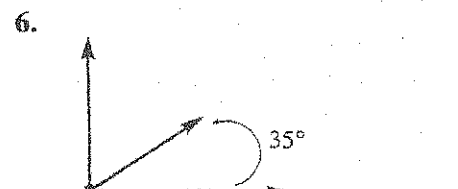

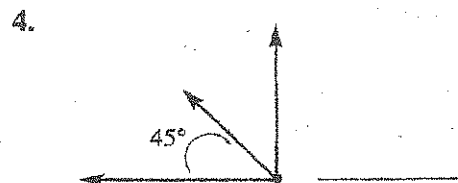



# Practice 3



## Reminder

- Any two angles whose sum is  $90^\circ$  are complementary.
- Any two angles whose sum is  $180^\circ$  are supplementary.

Directions: Find the complement for each angle shown below.



Directions: Find the supplement of each angle shown below.

